



TELLING THE TIME



Telling the Time

Telling The Time



What time is it?

Telling The Time



What is the time?

Telling The Time

It is

OR

It's

Telling The Time



For example,

What is the time?

It is 4:30pm.

Telling The Time

12-hour time

24-hour time

AM - morning

PM- afternoon/evening

Let's take this example...

4.20am

4.20am

FOUR

4.20am

TWENTY

4.20am

AM

4.20am

Four twenty AM

Let's take another example...

10.35pm

10.35pm

TEN

10.35pm

THIRTY-FIVE

Telling The Time

12-Hour

10.35pm

PM

10.35pm

Ten thirty-five PM

Let's take this example...

11:00am

11.00am

ELEVEN

11.00am

-

11.00am

AM

11.00am

Eleven AM

How do you say these 12-hour times?

3.45am

9.25pm

6.50am

3.45am

Three forty-five AM

9.25pm

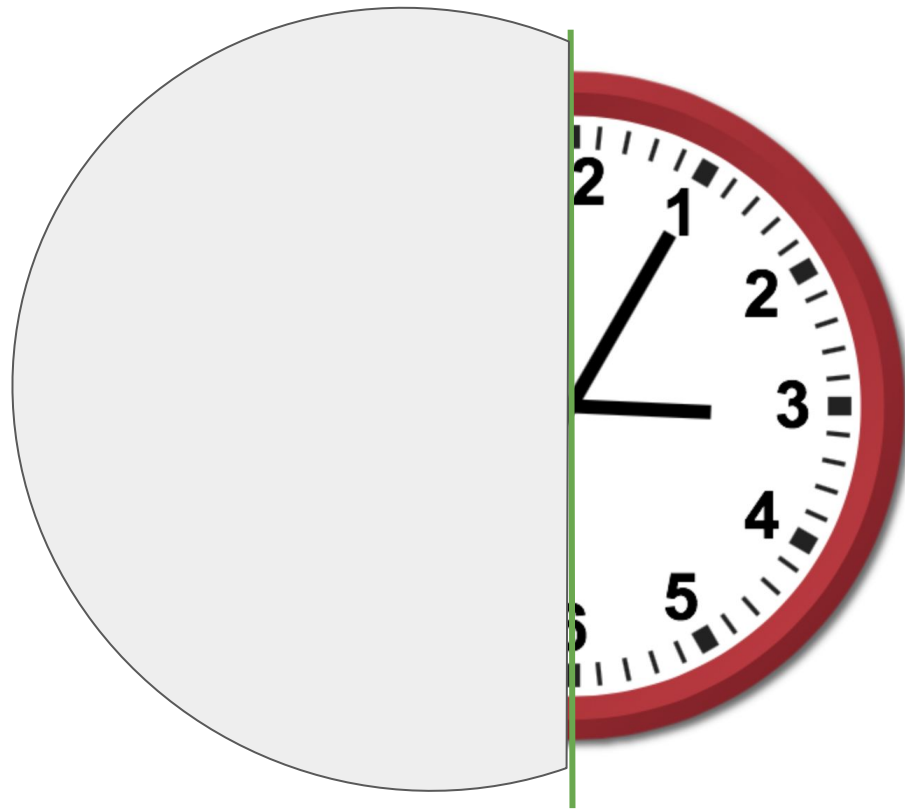
Nine twenty-five PM

6.50am

Six fifty AM

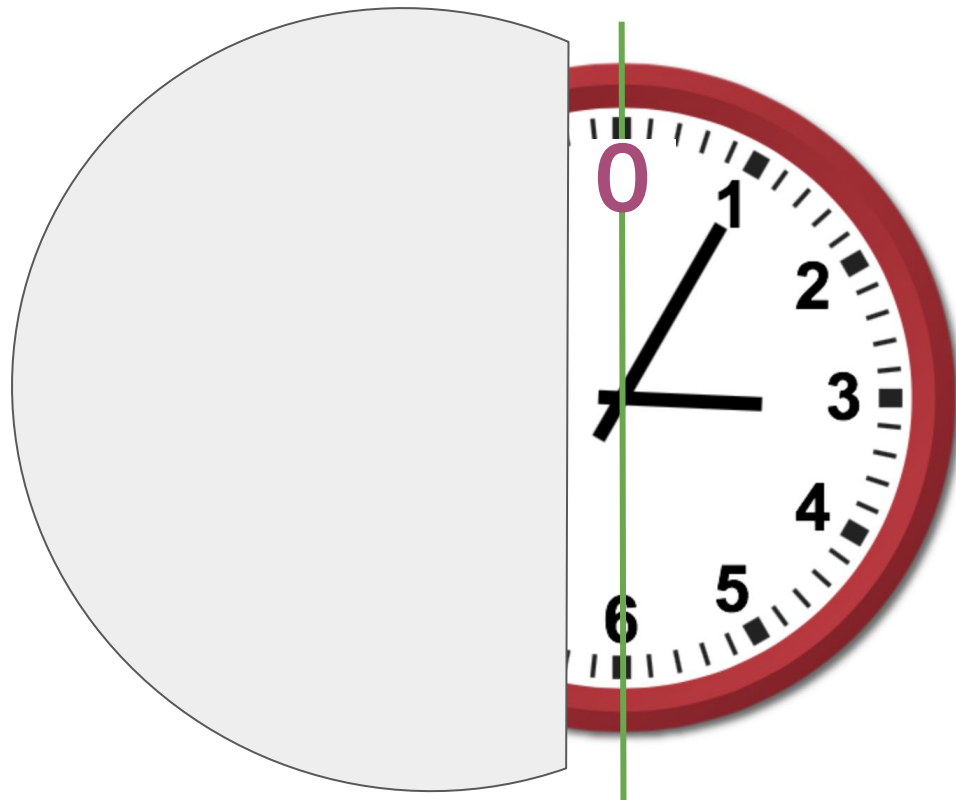
Telling The Time

24-Hour



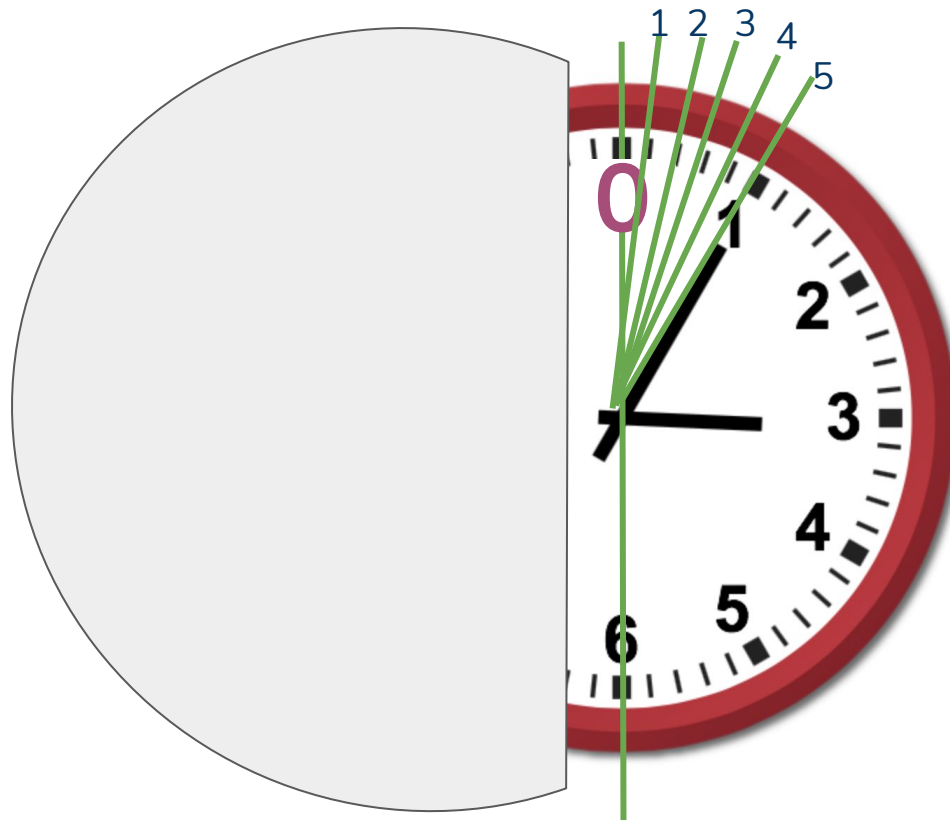
Telling The Time

24-Hour




Telling The Time

24-Hour



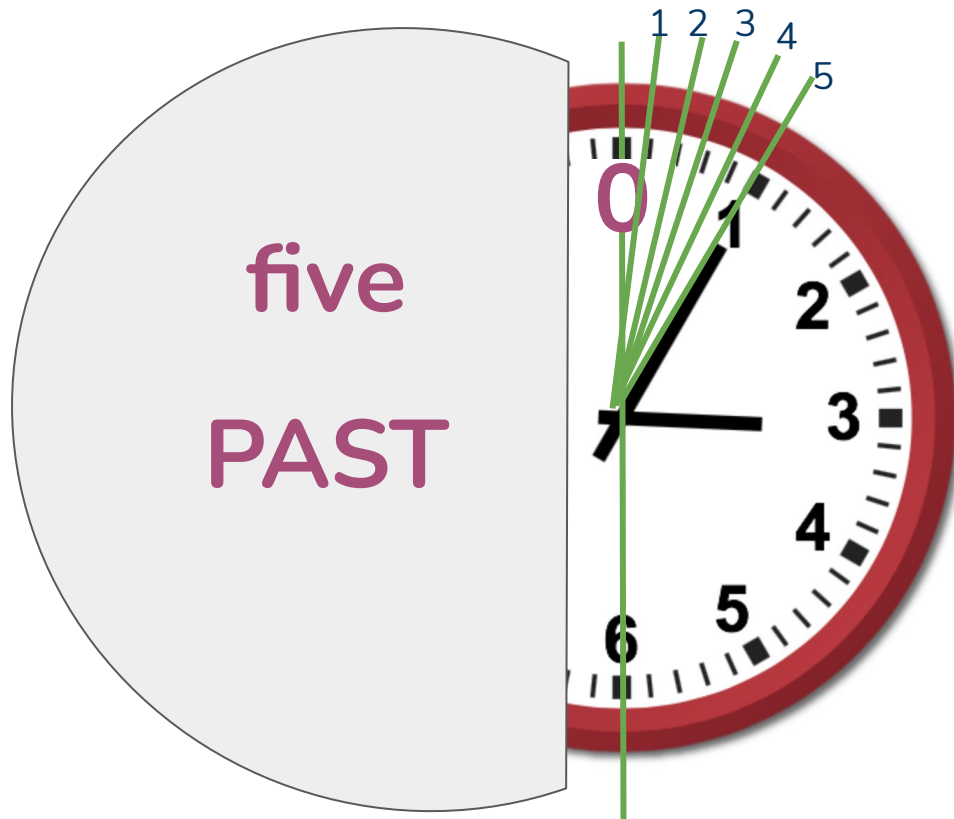
Telling The Time

24-Hour



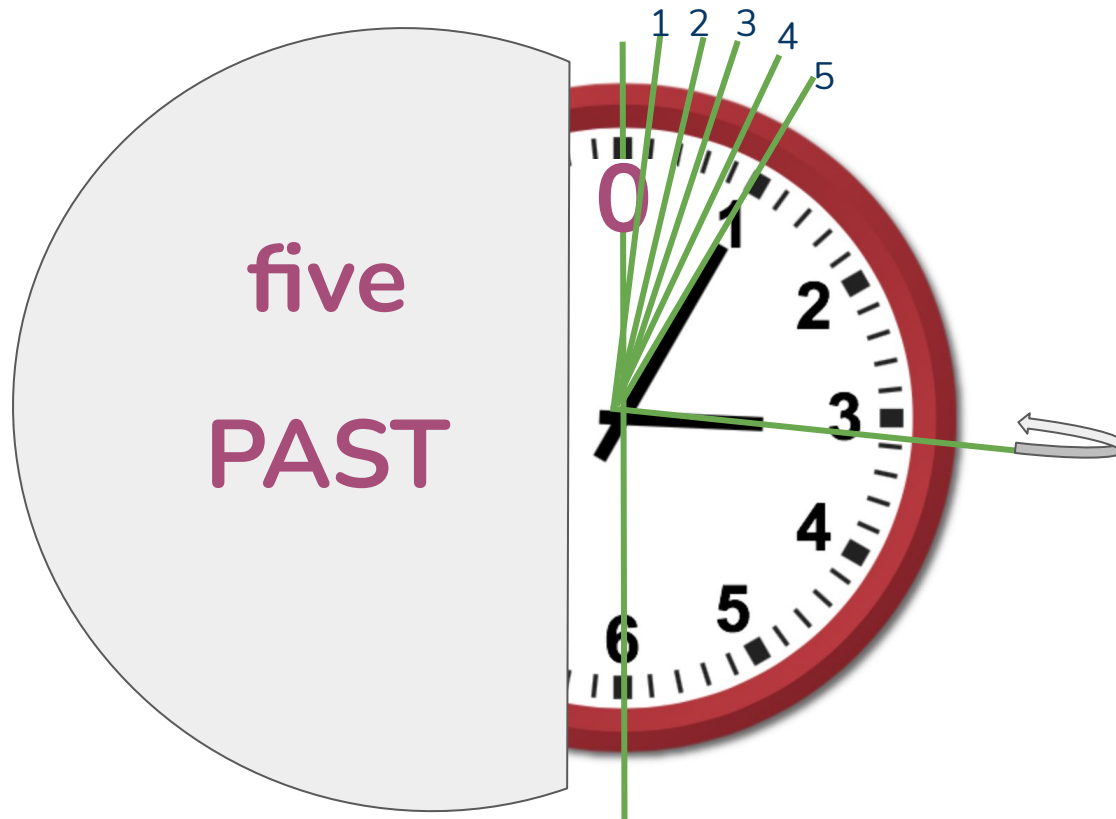
Telling The Time

24-Hour



Telling The Time

24-Hour




Telling The Time

24-Hour



five past three



24-Hour Time

Let's try another example!



24-Hour Time


STEP 1: Convert the number 12 to 0



24-Hour Time

STEP 2: Count the number of minutes
between 0 and the minute hand


This is 25 (twenty-five)



24-Hour Time

STEP 3: Say the word “past”


This is **twenty-five**
past



24-Hour Time

STEP 4: Say the number that is immediately
before the hour hand

This is **twenty-five**
past six

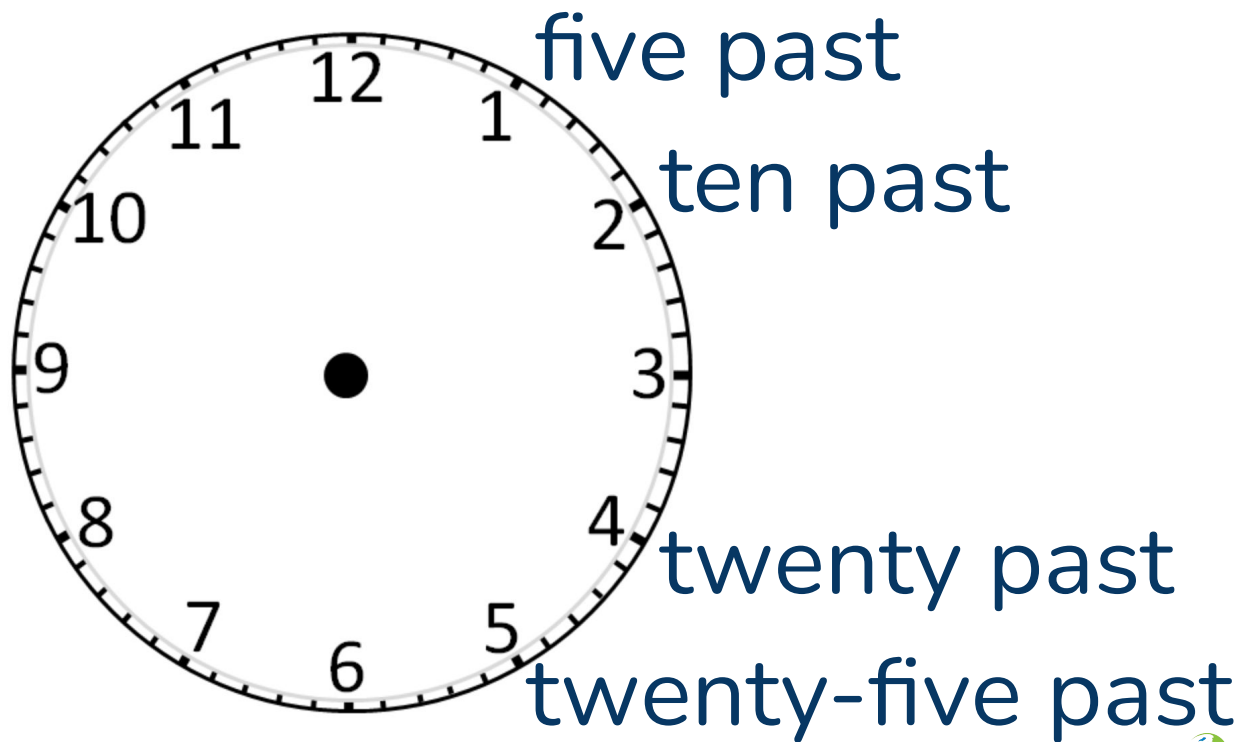


24-Hour Time

twenty-five past six

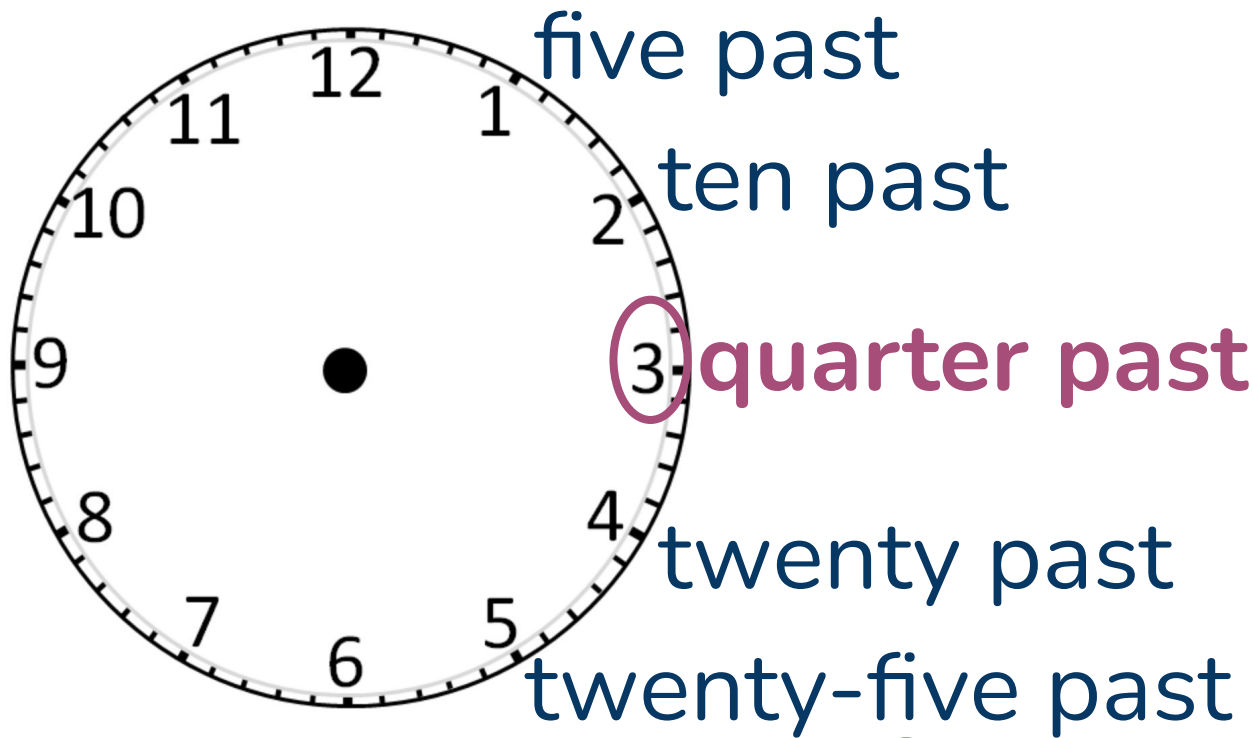


24-Hour Time




24-Hour Time

QUARTER
PAST



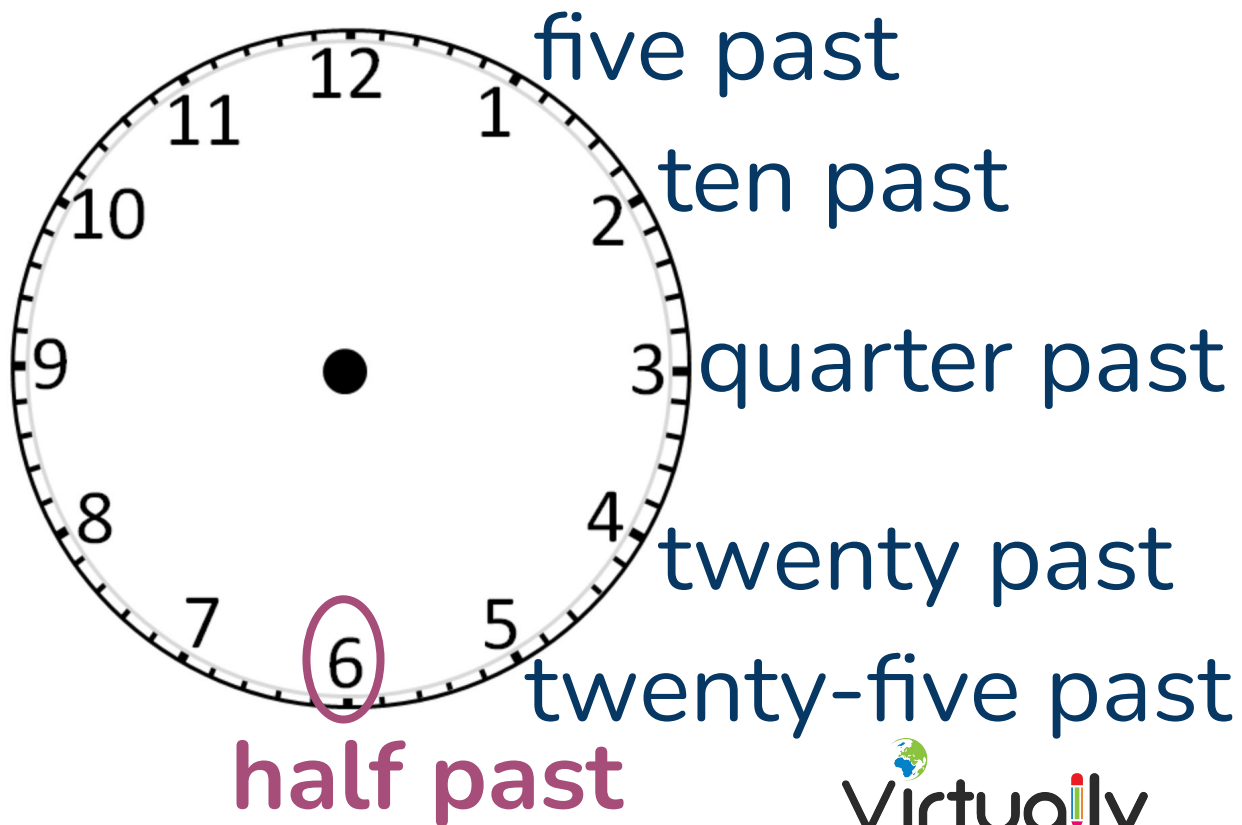
24-Hour Time

QUARTER PAST SIX



24-Hour Time

HALF PAST



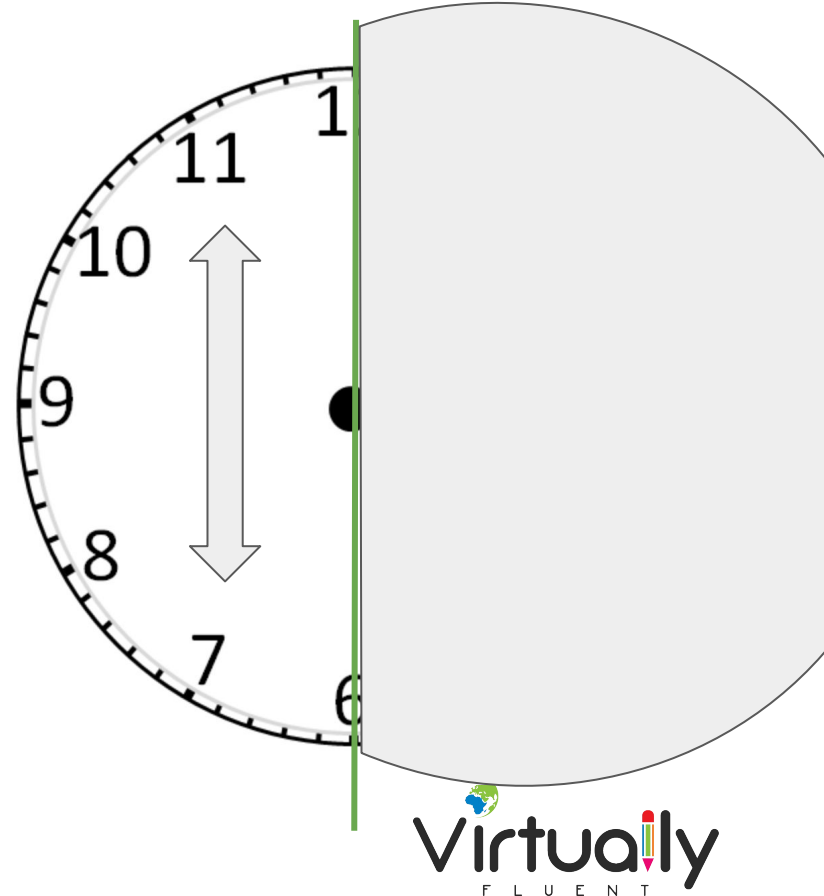
24-Hour Time

HALF PAST NINE

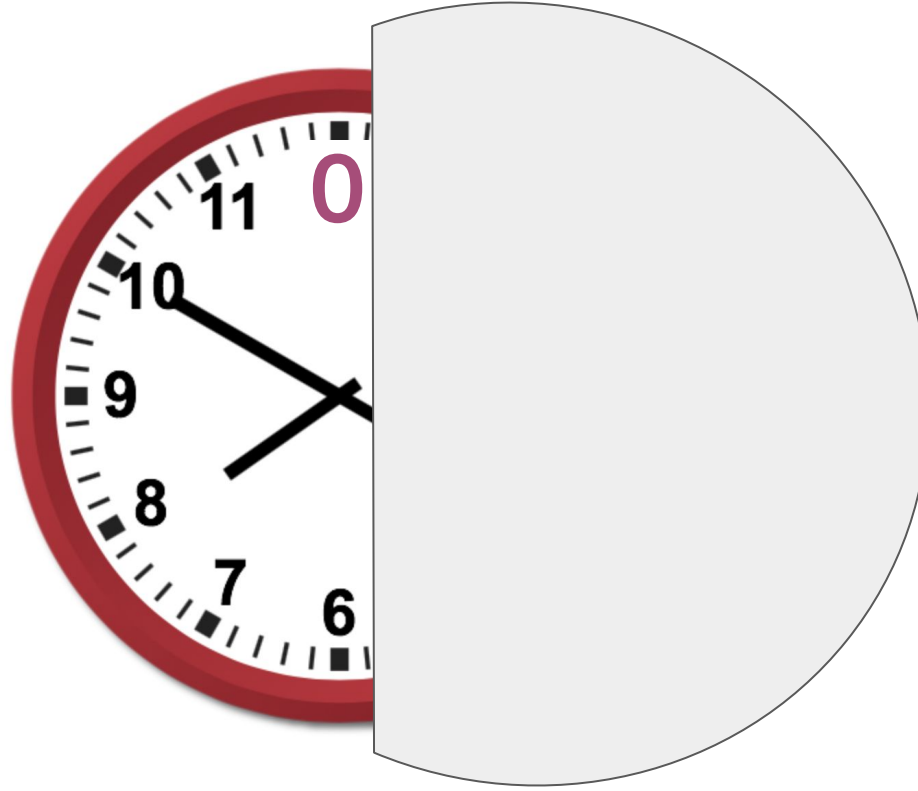


24-Hour Time

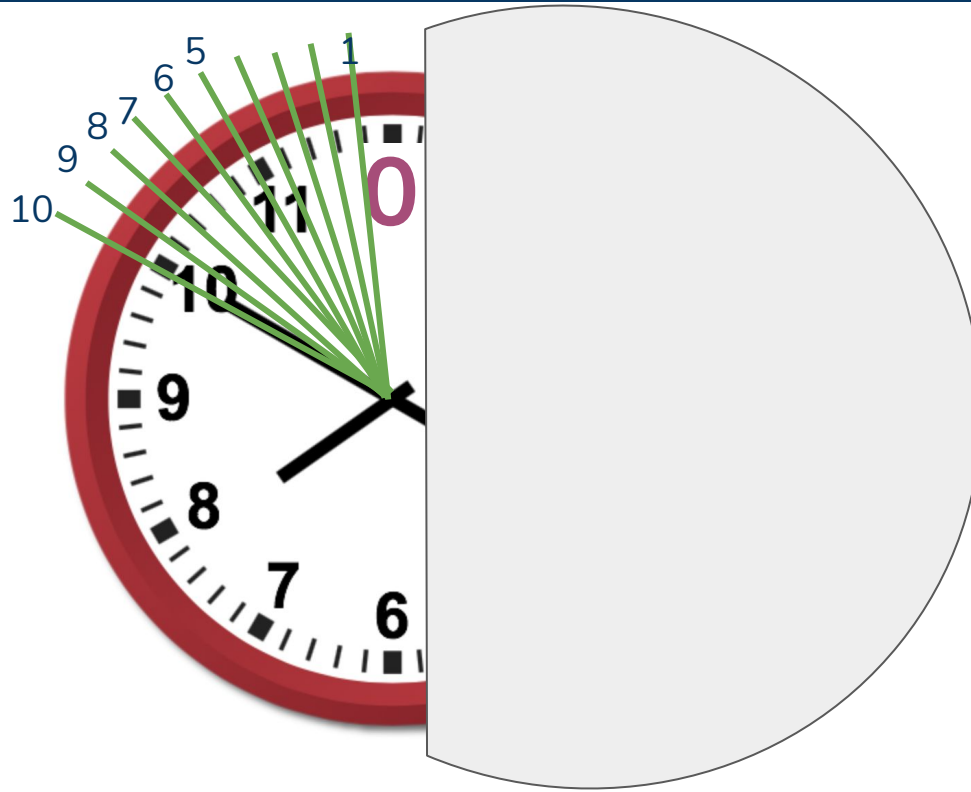
This side is different!



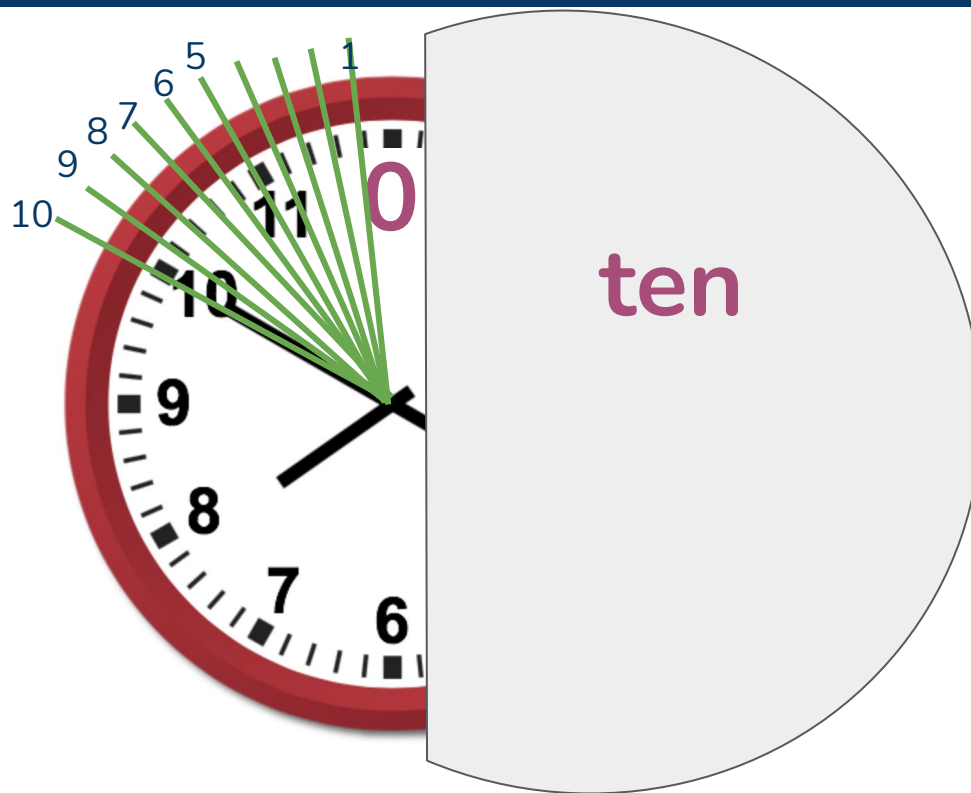
24-Hour Time



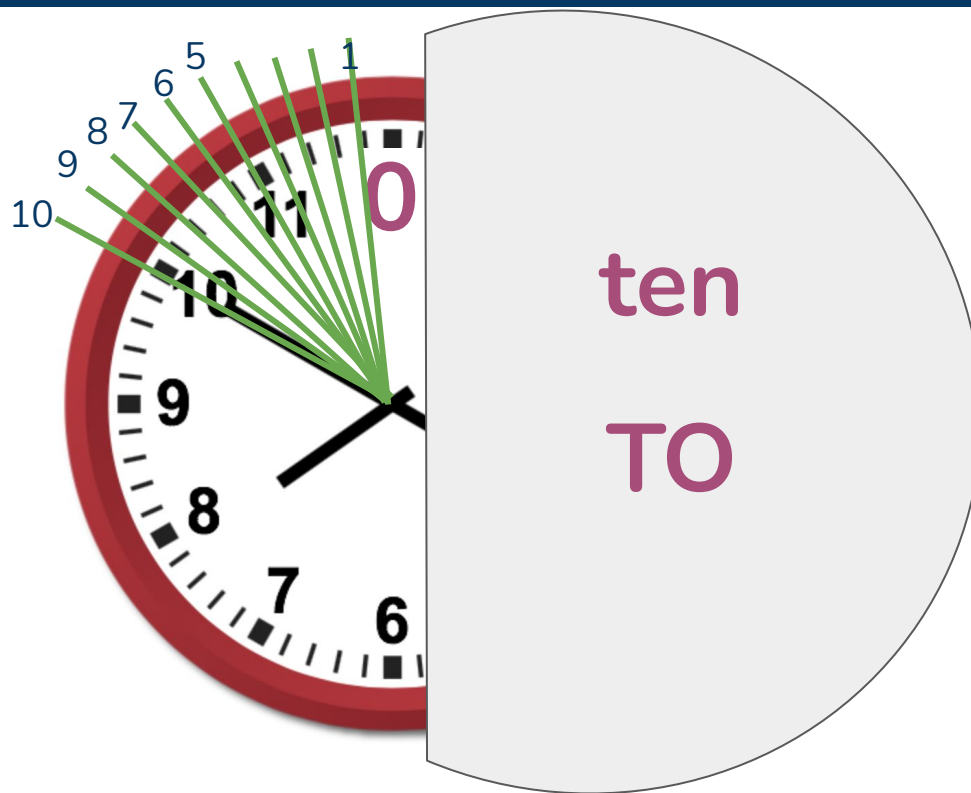
24-Hour Time



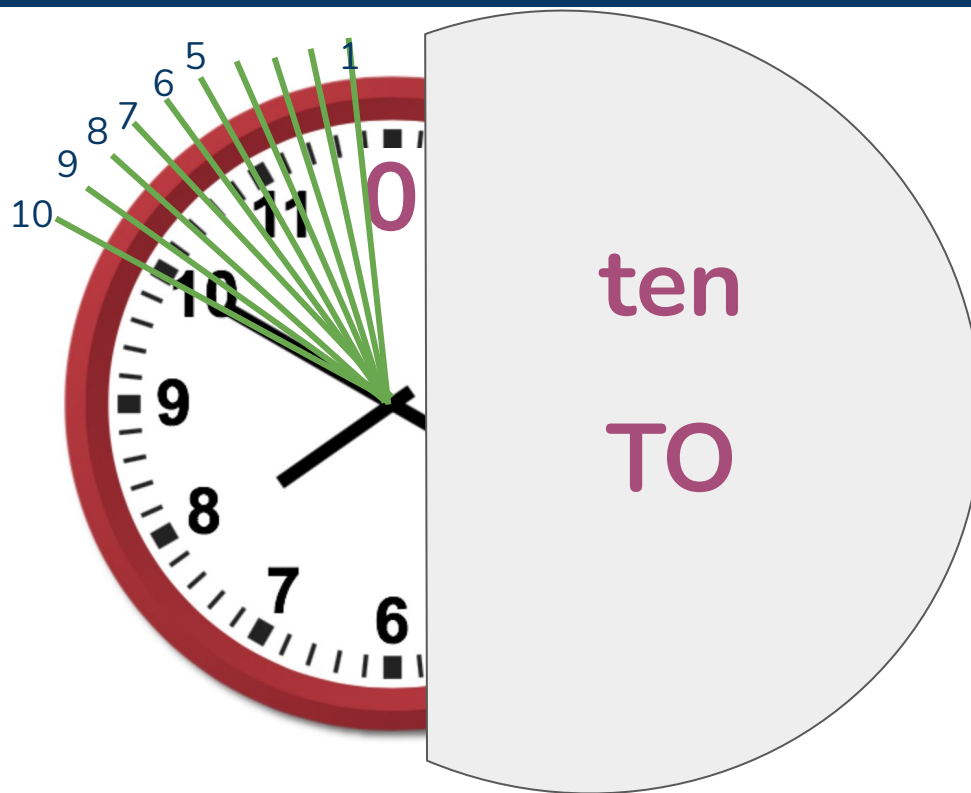
24-Hour Time



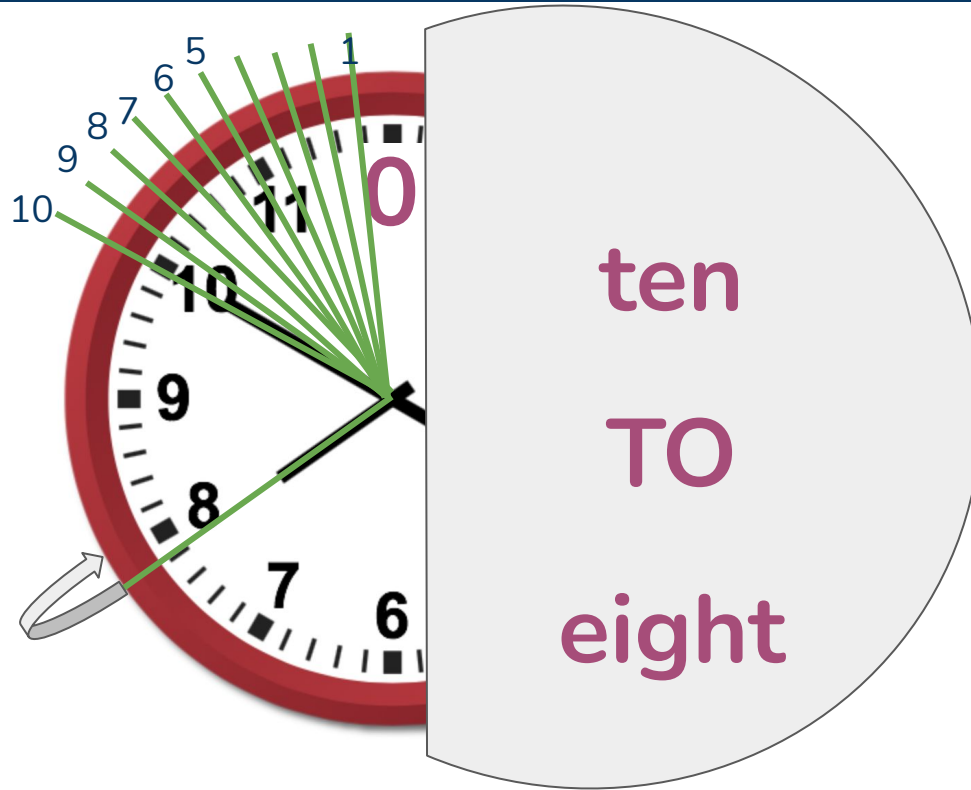
24-Hour Time



24-Hour Time



24-Hour Time



24-Hour Time

ten to eight



24-Hour Time

Let's try another example!



24-Hour Time


STEP 1: Convert the number 12 to 0



24-Hour Time

STEP 2: Count the number of minutes
between 0 and the minute hand


This is 5 (five).



24-Hour Time

STEP 3: Say the word “past”


This is **five to**.



24-Hour Time

STEP 4: Say the number that is immediately after the hour hand

This is **five to seven**.



24-Hour Time

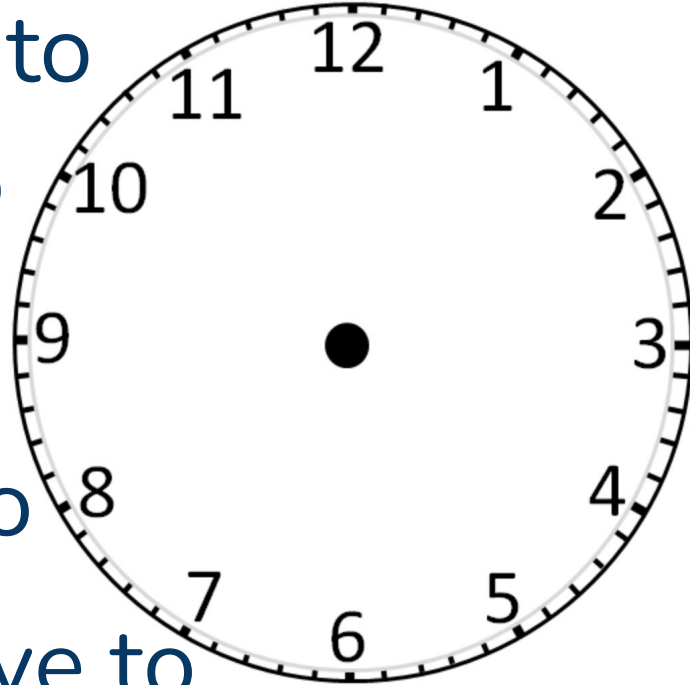
five to seven



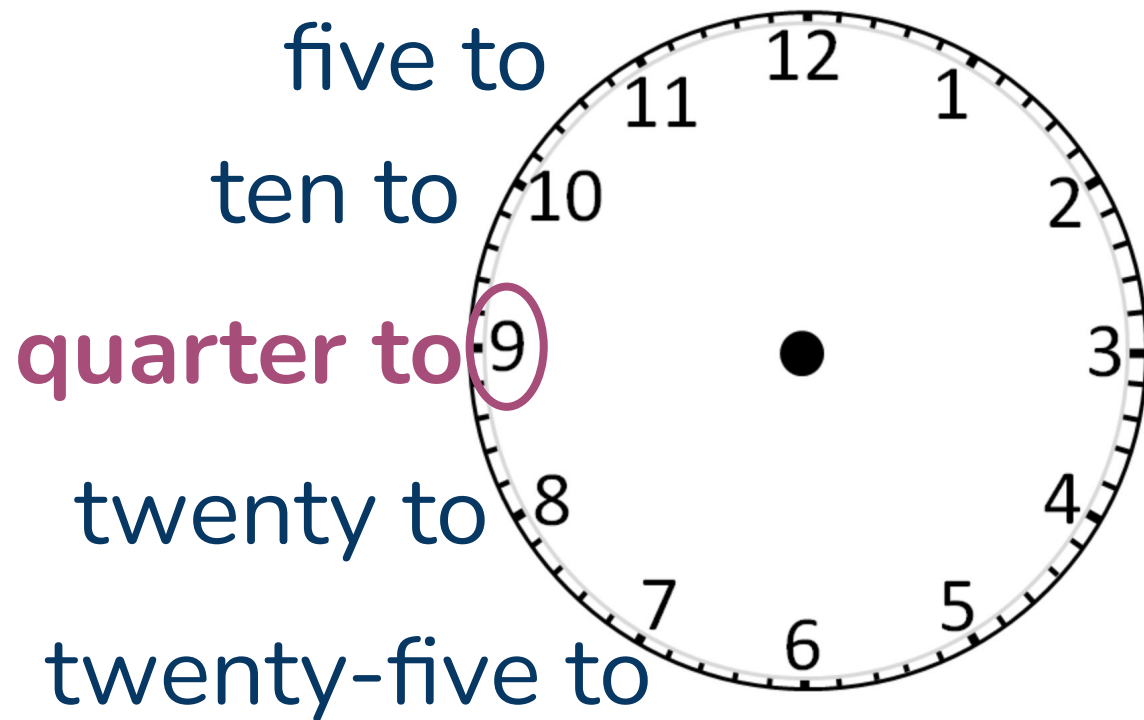
24-Hour Time

five to
ten to

twenty to
twenty-five to



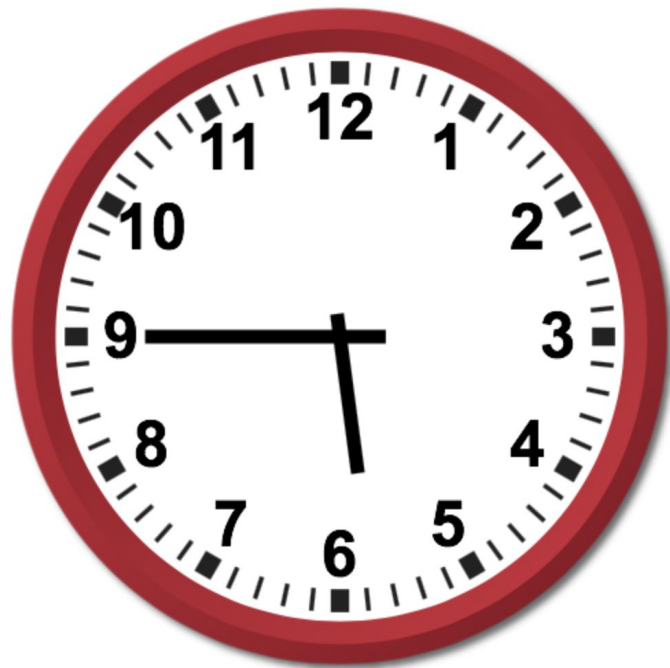
24-Hour Time



QUARTER
TO

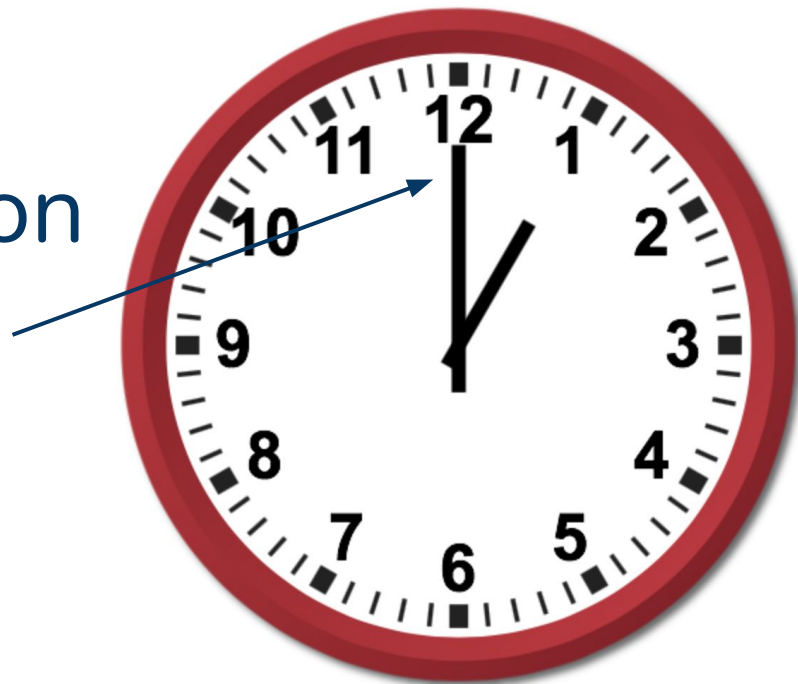
24-Hour Time

QUARTER TO SIX



24-Hour Time

The minute hand is on
12



24-Hour Time

First we say the
number of the hour
hand.



24-Hour Time

ONE



24-Hour Time

o'clock



24-Hour Time

One o'clock



24-Hour Time

Let's try another example!



24-Hour Time

This is ten o'clock.

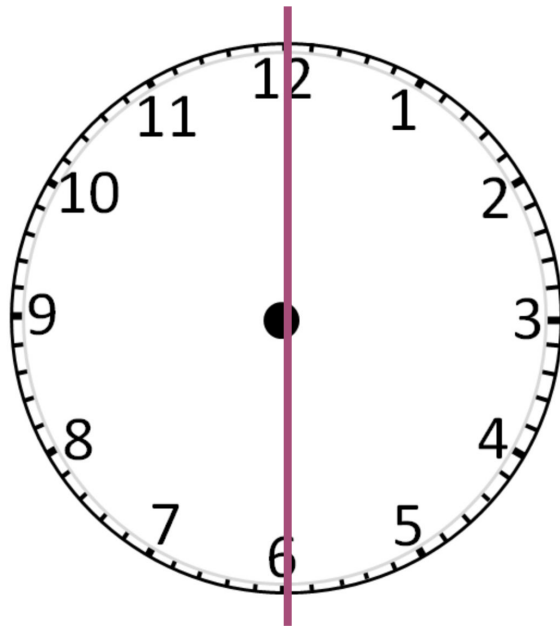


Review



24-Hour Time

The clock has two different sides.



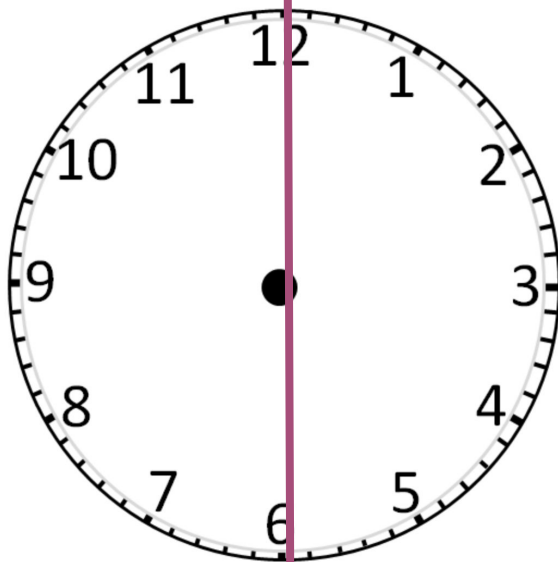
24-Hour Time

STEP 1: Convert 12 to 0

STEP 2: Count the number of minutes between 0 and the minute hand

STEP 3: Say “to”

STEP 4: Say the number that is immediately after the hour hand



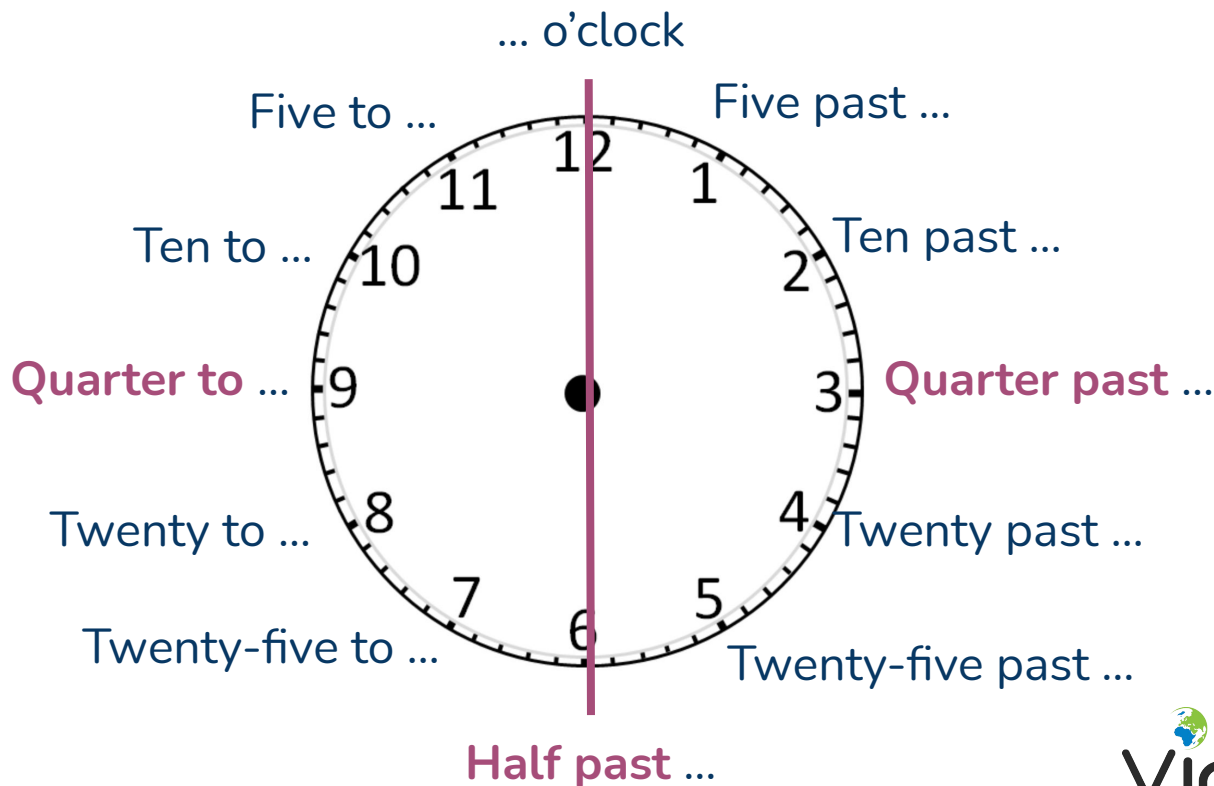
STEP 1: Convert 12 to 0

STEP 2: Count the number of minutes between 0 and the minute hand

STEP 3: Say “past”

STEP 4: Say the number that is immediately before the hour hand

24-Hour Time



Practice 1



Telling The Time

What is the time now in your country?

Practice 2



Telling The Time

What's the time?

<https://helpingwithmath.com/3md1-clock-face-generator01/>

Practice 3



Telling The Time

Listen to the audio and fill in the gaps.

Telling The Time

1. We have an appointment this afternoon at _____.
2. Your table has been reserved for _____.
3. This train leaves at _____.
4. I normally wake up at _____.
5. My maths class is between _____ and _____.
6. The meeting lasted from _____ to _____.
7. My boss didn't message me until _____ at night!
8. Shall we meet at _____ then?
9. I think my bus gets in at _____.
10. The order will arrive between _____ and _____.

Telling The Time

1. We have an appointment this afternoon at **eight o'clock (8:00)**.
2. Your table has been reserved for_____.
3. This train leaves at _____.
4. I normally wake up at _____.
5. My maths class is between _____ and _____.
6. The meeting lasted from_____ to _____.
7. My boss didn't message me until _____ at night!
8. Shall we meet at _____ then?
9. I think my bus gets in at _____.
10. The order will arrive between_____ and _____.

Telling The Time

1. We have an appointment this afternoon at **eight o'clock (8:00)**.
2. Your table has been reserved for **five thirty (5:30)**.
3. This train leaves at _____.
4. I normally wake up at _____.
5. My maths class is between _____ and _____.
6. The meeting lasted from _____ to _____.
7. My boss didn't message me until _____ at night!
8. Shall we meet at _____ then?
9. I think my bus gets in at _____.
10. The order will arrive between _____ and _____.

Telling The Time

1. We have an appointment this afternoon at **eight o'clock (8:00)**.
2. Your table has been reserved for **five thirty (5:30)**.
3. This train leaves at **four forty-five (4:45)**.
4. I normally wake up at _____.
5. My maths class is between _____ and _____.
6. The meeting lasted from _____ to _____.
7. My boss didn't message me until _____ at night!
8. Shall we meet at _____ then?
9. I think my bus gets in at _____.
10. The order will arrive between _____ and _____.

Telling The Time

1. We have an appointment this afternoon at **eight o'clock (8:00)**.
2. Your table has been reserved for **five thirty (5:30)**.
3. This train leaves at **four forty-five (4:45)**.
4. I normally wake up at **six fifty-five (6:55)**.
5. My maths class is between _____ and _____.
6. The meeting lasted from _____ to _____.
7. My boss didn't message me until _____ at night!
8. Shall we meet at _____ then?
9. I think my bus gets in at _____.
10. The order will arrive between _____ and _____.

Telling The Time

1. We have an appointment this afternoon at **eight o'clock (8:00)**.
2. Your table has been reserved for **five thirty (5:30)**.
3. This train leaves at **four forty-five (4:45)**.
4. I normally wake up at **six fifty-five (6:55)**.
5. My maths class is between **quarter past four** and **quarter to five (4:15-4:45)**.
6. The meeting lasted from _____ to _____.
7. My boss didn't message me until _____ at night!
8. Shall we meet at _____ then?
9. I think my bus gets in at _____.
10. The order will arrive between _____ and _____.

Telling The Time

1. We have an appointment this afternoon at **eight o'clock (8:00)**.
2. Your table has been reserved for **five thirty (5:30)**.
3. This train leaves at **four forty-five (4:45)**.
4. I normally wake up at **six fifty-five (6:55)**.
5. My maths class is between **quarter past four** and **quarter to five (4:15-4:45)**.
6. The meeting lasted from **two thirty** to **six fifteen (2:30-6:15)**.
7. My boss didn't message me until _____ at night!
8. Shall we meet at _____ then?
9. I think my bus gets in at _____.
10. The order will arrive between _____ and _____.

Telling The Time

1. We have an appointment this afternoon at **eight o'clock (8:00)**.
2. Your table has been reserved for **five thirty (5:30)**.
3. This train leaves at **four forty-five (4:45)**.
4. I normally wake up at **six fifty-five (6:55)**.
5. My maths class is between **quarter past four** and **quarter to five (4:15-4:45)**.
6. The meeting lasted from **two thirty** to **six fifteen (2:30-6:15)**.
7. My boss didn't message me until **eight thirty (8:30)** at night!
8. Shall we meet at _____ then?
9. I think my bus gets in at _____.
10. The order will arrive between _____ and _____.

Telling The Time

1. We have an appointment this afternoon at **eight o'clock (8:00)**.
2. Your table has been reserved for **five thirty (5:30)**.
3. This train leaves at **four forty-five (4:45)**.
4. I normally wake up at **six fifty-five (6:55)**.
5. My maths class is between **quarter past four** and **quarter to five (4:15-4:45)**.
6. The meeting lasted from **two thirty** to **six fifteen (2:30-6:15)**.
7. My boss didn't message me until **eight thirty (8:30)** at night!
8. Shall we meet at **four twenty-five (4:25)** then?
9. I think my bus gets in at _____.
10. The order will arrive between _____ and _____.


Telling The Time

1. We have an appointment this afternoon at **eight o'clock (8:00)**.
2. Your table has been reserved for **five thirty (5:30)**.
3. This train leaves at **four forty-five (4:45)**.
4. I normally wake up at **six fifty-five (6:55)**.
5. My maths class is between **quarter past four** and **quarter to five (4:15-4:45)**.
6. The meeting lasted from **two thirty** to **six fifteen (2:30-6:15)**.
7. My boss didn't message me until **eight thirty (8:30)** at night!
8. Shall we meet at **four twenty-five (4:25)** then?
9. I think my bus gets in at **half past nine (9:30)**.
10. The order will arrive between_____ and _____

Telling The Time

1. We have an appointment this afternoon at **eight o'clock (8:00)**.
2. Your table has been reserved for **five thirty (5:30)**.
3. This train leaves at **four forty-five (4:45)**.
4. I normally wake up at **six fifty-five (6:55)**.
5. My maths class is between **quarter past four** and **quarter to five (4:15-4:45)**.
6. The meeting lasted from **two thirty** to **six fifteen (2:30-6:15)**.
7. My boss didn't message me until **eight thirty (8:30)** at night!
8. Shall we meet at **four twenty-five (4:25)** then?
9. I think my bus gets in at **half past nine (9:30)**.
10. The order will arrive between **ten twenty** and **eleven twenty (10:20-11:20)**.

Any questions?






TELLING THE TIME



REVIEW



Telling The Time Course



HOMEWORK

COMPLETE THE TIME QUIZ

Link:

<https://virtually-fluent.com/quizzes/telling-the-time-quiz/>